

# Odd and Even



# Aim

- To understand what an odd number is.
- To understand what an even number is.

# What Is An Odd Number?

1, 3, 5, 7, 9

Odd numbers have one out of line.


If a number ends in a **1, 3, 5, 7** or **9** it is an odd number.




1




3



5



7



9

Click for  
interesting fact!

There is always an odd one out.


# What Is An Even Number?

0, 2, 4, 6, 8


Even numbers have a mate.

If a number ends in a **0**, **2**, **4**, **6** or **8** it is an even number.

0




2



4



6



8

Click for  
interesting fact!

Even numbers are in the 2 times table.

# Can You Sort These Numbers?

When your teacher says a number, write down **odd** or **even**.  
Click on the numbers to reveal the answers!

7 1 15 3 4 20 6 13 11 9

5 16 19 10 12 18 2 17 8 14

**Odd**

**Even**

# Think About It

**Question:** If you add an even number and an even number together, what type of number do you get?

**Answer:** You always get an even number.

**Question:** If you add an odd number and an odd number together, what type of number do you get?

**Answer:** You always get an even number.

**Question:** If you add an odd number and an even number, what do you get?

**Answer:** You always get an odd number.

