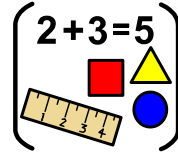


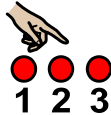
2



Week 2: Maths



1



123



Activity 1: Count the number of chocolate buttons or

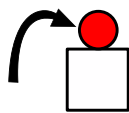


drops


to



put



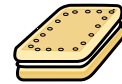
onto



your



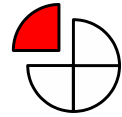
Numicon



biscuits.




2



Activity 2: Find the correct numbered Numicon piece.

?

Can



you



match

it to the

correct



numeral?

12③



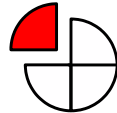
3



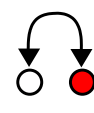
Eat

2

two



pieces



which

=

equal


10.

Can

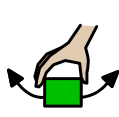
?

Can

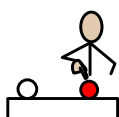
Activity 3:



you



use



this

to



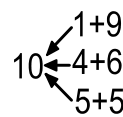
find



any

number bonds

to



20

20?