

Summer Maths Challenge Mat 1


Section 1

What's next?

2	4	6	8			
---	---	---	---	--	--	--

Section 2

Add 1 more flower.



There would be flowers altogether

Section 3

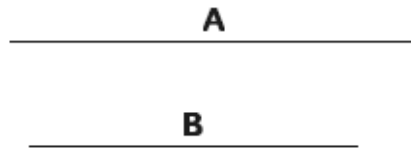
What's the missing number?

$$8 - \square = 6$$




Section 4

Which line is the longest?



Section 5

If Lisa has 4 apples and she shares them equally with Sarah, how many apples will they have each?



Section 6

Colour half of these shapes.



Section 7

Circle the odd numbers:

2 8 3

7 1 6

Section 8

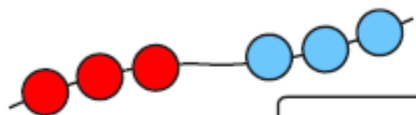
Fill in the missing boxes:

$$2 + \square = 10$$

$$6 + \square = 10$$

Section 1

Write a number sentence to show how many beads there are altogether.



Section 3

If today is Monday, what is it tomorrow?

Put a circle around the correct day.

Tuesday Wednesday Sunday

Section 4

Imagine seeing 1 elephant at the zoo.

How many legs would you see?

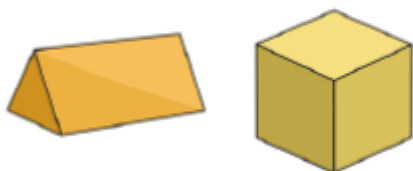
Section 2

Draw and colour the next 2 cars in the pattern.



Section 5

Draw lines to match the name and the shape.



cube

triangular
prism

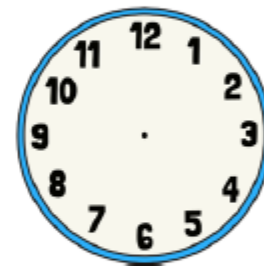
Section 6

Which jug is full?
Tick the correct one.



Section 7

Make this clock show 4 o'clock.



Section 8

How much money is here?



Section 1

I have 2 pairs of shoes.

How many shoes is that altogether?



Section 2

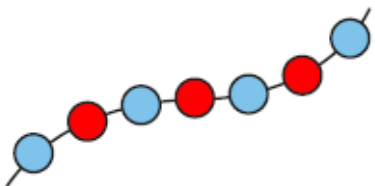
Shep had 3 dog biscuits.

Rover had 4. How many more biscuits did Rover have?



Section 3

Count the beads and write the number.



Section 4


I have 16p and I lose 5p.

How much money have I got left?



Section 5

Cut the cake in half.



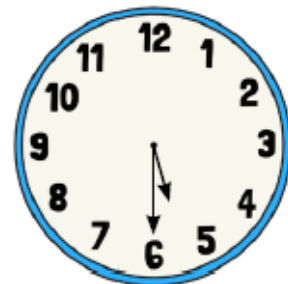
Section 6

What numbers are missing?

9	8	7	6			3		1
---	---	---	---	--	--	---	--	---

Section 7

What time is it?



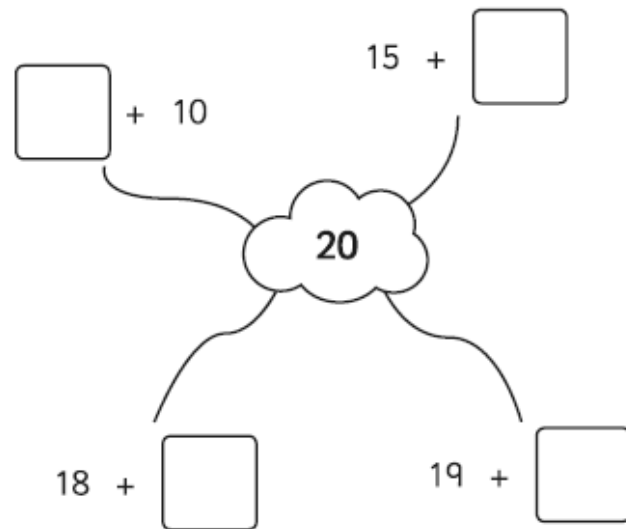
5 o'clock

Half past 6

Half past 5

Section 8

Complete the number pairs:



Section 1

There are 20 biscuits in a packet.

Grace eats 5.

Sara eats 6.

How many are left in the packet?



Section 2

Match the numbers with their names:

12 sixteen

15 eight

8 twelve

16 fifteen

Section 5

Draw the coins you need to make 14p.

Section 6

Choose the correct symbol to complete the number sentence.

- x +

2 5 = 7

8 4 = 4

Section 3

Which would weigh more? Circle the heaviest.



or



or



or



Section 4

20 → 10 less →

50 → 10 less →

80 → 10 less →

30 → 10 less →

Section 7

Draw a picture to show this:
 $1 + 9 = 10$

Section 8

It's Mickey's birthday tomorrow. Today is Saturday. What day is Mickey's birthday?

Summer Maths Challenge Mat 5

Section 1

Jed had 7 football stickers.

Jamie had double that.

How many stickers did Jamie have?



Section 2

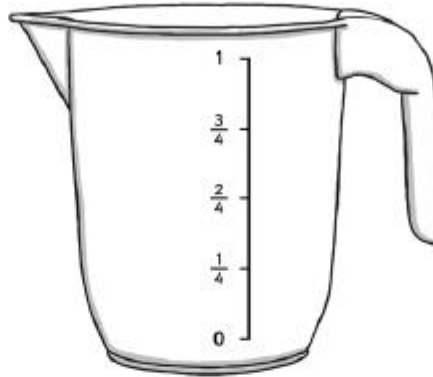
I buy a packet of cakes for £2.

How much would 2 packets cost?



Section 3

Colour in the juice to show the jug is one quarter full.



Section 4

Share these bananas equally into 4 groups.



How many bananas in each group?


Section 5

How long is the pencil?



Section 6

How many lots of ten are there in 15?



Section 7

Maya is 7 years old.

Her sister is 4 years older.

How old is her sister?

Section 8

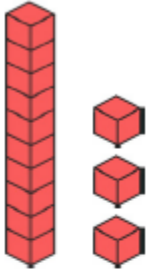
8 tomatoes were shared equally onto each slice.

How many tomatoes were on each slice?



Section 1

How many blocks are there?



Section 2



Can I buy the ice cream?

Section 3

What numbers come next?

5	10	15			
---	----	----	--	--	--

Section 6

Order these numbers from smallest to largest.

3 1 9 5

--	--	--	--

Section 7

Complete these statements:

6 is 1 more than

8 is 1 more than

Section 4

How many wheels are there altogether?



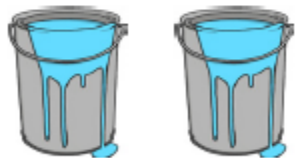
Section 5

There are 2 paintbrush pots.

There are 10 brushes.

Share the brushes equally in to the pots.

How many brushes into each pot?



Section 8

How many chocolate buttons are there altogether?

Write a number sentence to show this:

